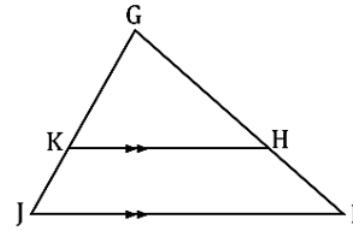


DATE: _____

1. Fill in the blanks of the two column proof.

Given: $\overline{JI} \parallel \overline{KH}$

Prove: $\Delta JGI \sim \Delta KGH$



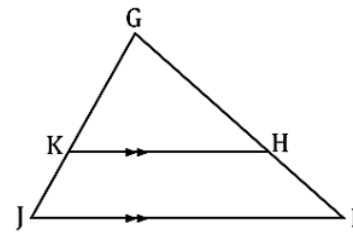
Statement	Reason
1. $\overline{JI} \parallel \overline{KH}$	1.
2.	2.
3. $\angle GIJ \cong \angle GHK$	3.
4. $\Delta JGI \sim \Delta KGH$	4.

DATE: _____

1. Fill in the blanks of the two column proof.

Given: $\overline{JI} \parallel \overline{KH}$

Prove: $\Delta JGI \sim \Delta KGH$

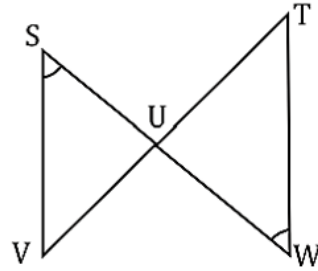


Statement	Reason
1. $\overline{JI} \parallel \overline{KH}$	1.
2.	2.
3. $\angle GIJ \cong \angle GHK$	3.
4. $\Delta JGI \sim \Delta KGH$	4.

2. Fill in the blanks of the two column proof.

Given: $\angle S \cong \angle W$

Prove: $\Delta SUV \sim \Delta TUW$

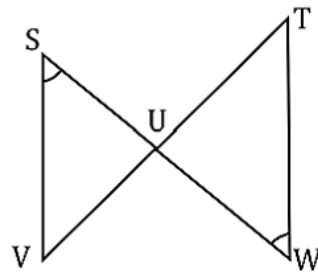


Statement	Reason
1. $\angle S \cong \angle W$	1.
2. $\angle SUV \cong \angle WUT$	2.
3.	3.

2. Fill in the blanks of the two column proof.

Given: $\angle S \cong \angle W$

Prove: $\Delta SUV \sim \Delta TUW$



Statement	Reason
1. $\angle S \cong \angle W$	1.
2. $\angle SUV \cong \angle WUT$	2.
3.	3.